




Name

ANIMAL DIVISION

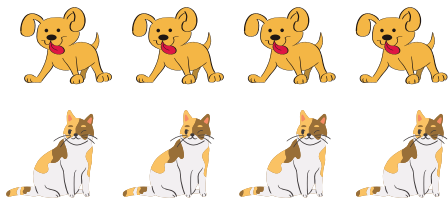
Practice your division skills using the animal groupings below.




$$6 \div 2 = \underline{3}$$




$$4 \div 2 = \underline{\quad}$$




$$8 \div 2 = \underline{\quad}$$



$$9 \div 3 = \underline{\quad}$$



$10 \div 2 = \underline{\quad}$



$12 \div 3 = \underline{\quad}$



$2 \div 2 = \underline{\quad}$



$8 \div 4 = \underline{\quad}$



$3 \div 3 = \underline{\quad}$