


Name _____



TACO-BOUT MATH!

Practice your expanded math form expanding the numbers in the first taco to the hundreds, tens, and ones as modeled in the first set.

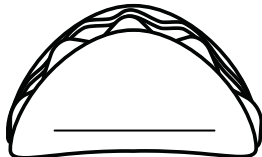
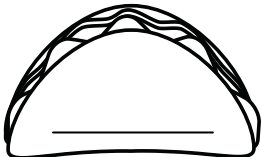
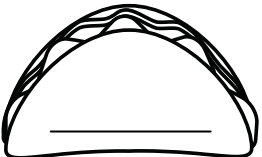
$$\begin{array}{c} \text{432} \\ \text{---} \end{array} = \begin{array}{c} \text{400} \\ \text{---} \end{array} + \begin{array}{c} \text{30} \\ \text{---} \end{array} + \begin{array}{c} \text{2} \\ \text{---} \end{array}$$

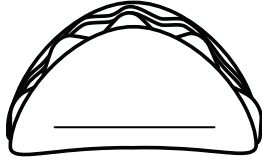
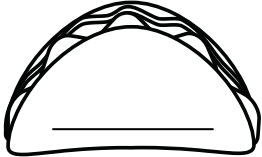
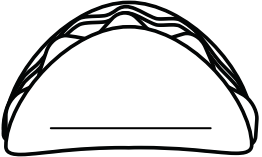
$$\begin{array}{c} \text{876} \\ \text{---} \end{array} = \begin{array}{c} \text{---} \\ \text{---} \end{array} + \begin{array}{c} \text{---} \\ \text{---} \end{array} + \begin{array}{c} \text{---} \\ \text{---} \end{array}$$

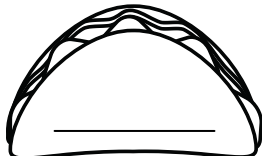
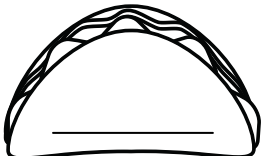
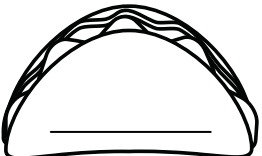
$$\begin{array}{c} \text{183} \\ \text{---} \end{array} = \begin{array}{c} \text{---} \\ \text{---} \end{array} + \begin{array}{c} \text{---} \\ \text{---} \end{array} + \begin{array}{c} \text{---} \\ \text{---} \end{array}$$

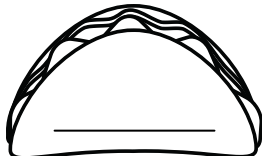
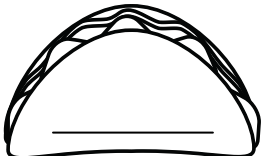
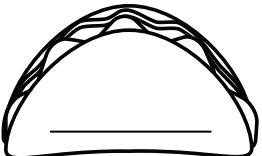
$$\begin{array}{c} \text{731} \\ \text{---} \end{array} = \begin{array}{c} \text{---} \\ \text{---} \end{array} + \begin{array}{c} \text{---} \\ \text{---} \end{array} + \begin{array}{c} \text{---} \\ \text{---} \end{array}$$

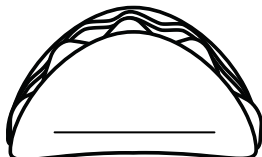
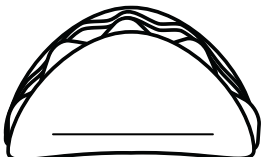
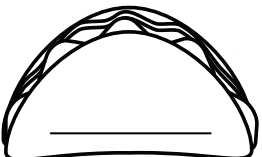
$$\begin{array}{c} \text{513} \\ \text{---} \end{array} = \begin{array}{c} \text{---} \\ \text{---} \end{array} + \begin{array}{c} \text{---} \\ \text{---} \end{array} + \begin{array}{c} \text{---} \\ \text{---} \end{array}$$

679 =  +  + 


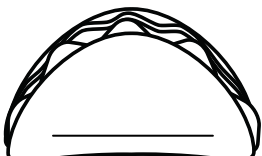
750 =  +  + 

886 =  +  + 

485 =  +  + 

210 =  +  + 

429 =  +  + 

575 =  +  + 